

## T3 Week 10 Spelling Sheet 'oy'

Words	Monday	Tuesday	Wednesday	Thursday
toy				
cowboy				
loyal				
annoy				
destroy				
enjoy				

## T3 Week 10 Spelling Sheet 'oy'

Words	Monday	Tuesday	Wednesday	Thursday
royal				
employ				
decoy				
convoy				
oyster				
gargoyle				



Name: \_\_\_\_\_

Date: \_\_\_\_\_

oy

Fill in the 'oy' words below.

In the box below, draw something you enjoy doing.

j \_\_\_\_\_





r \_\_\_\_\_ al



b \_\_\_\_\_



t \_\_\_\_\_



## The Three Kangaroos Gruff

*Answer the following questions.*

1. What colour teeth does the Bunyip have? Why do you think they are this colour?

---

---

---


2. Look the Bunyip's feet. Why do you think it has webbed feet? What other animal has webbed feet?

---

---

---

3. Draw a scene from the book (e.g. a kangaroo crossing the bridge)



# Party Shopping List



## Week 10 – Art

### Spring Hairdos

**Resources:** A piece of A4 size paper or cardboard (an old cereal box would be perfect), textas or pencils, scissors.

**Step 1** – Draw an outline of a face **without the hair** onto a piece of cardboard. Make sure you plan your work by drawing the outline of your face with your finger first to ensure it fits the size of the paper.



**Step 2** – Cut around the outline of your drawing.


**Step 3** – Take your face picture outside into your yard and place it against some flowers, plants, weeds or other interesting natural things to make it look like your face has hair. Remember there is no need to pick the flowers.



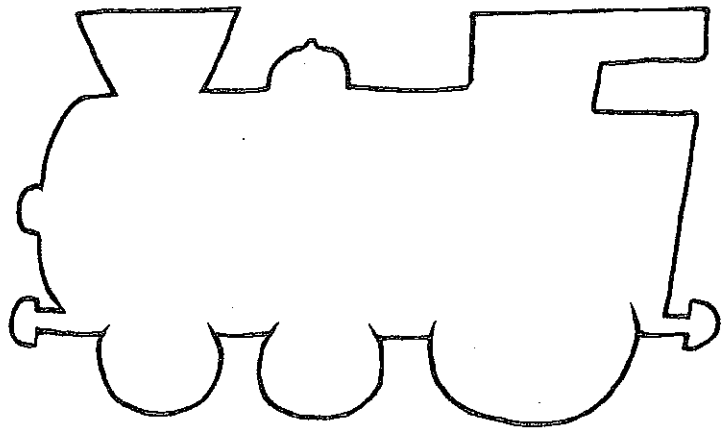

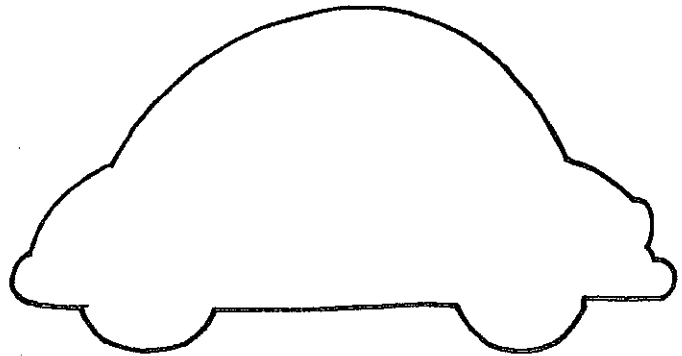
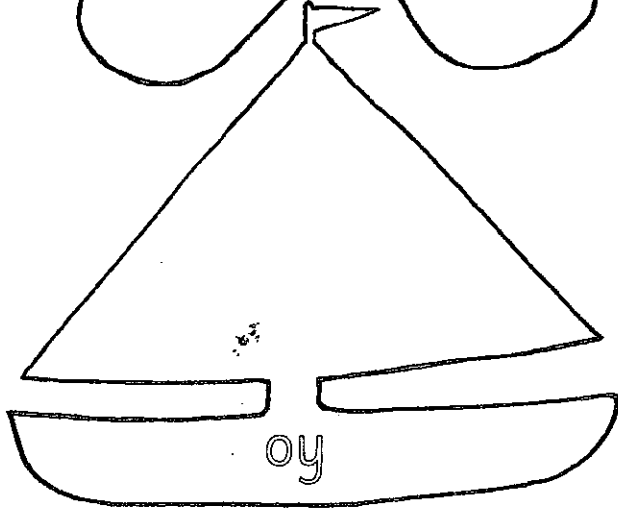
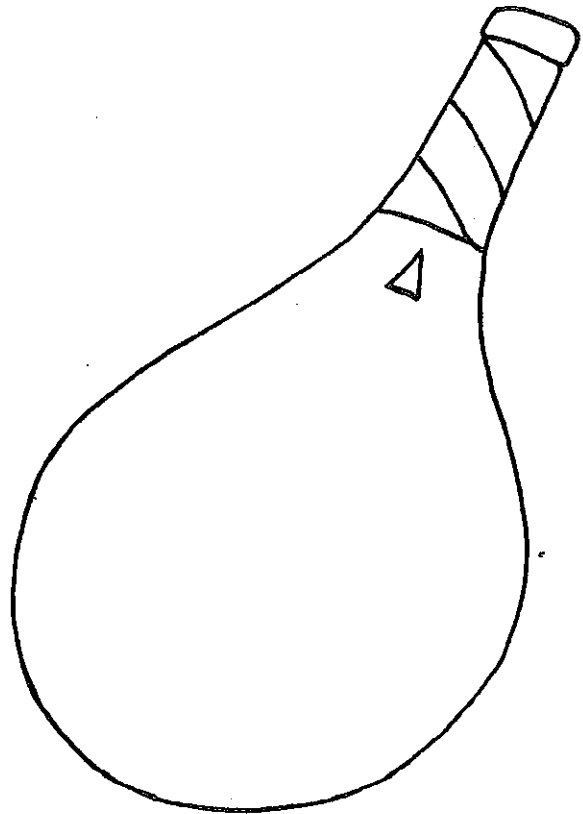

**Step 4** – If you can take some photos to share with your class.

## The 3 Billy Goats Gruff 3D Scene Ideas

Below are some images to help you with ideas when you create a 3D model of a scene from 'The Billy Goats Gruff'.



Write an <oy> word and draw a picture in each toy.



**Action:** Cup hands around mouth and shout as if to another boat, *oi!, ship ahoy!*



# Alphabetical Order

Put these words into alphabetical order.

1. car tractor lorry

---

2. hamster cat rabbit

---

3. lemon apple banana

---

4. Sam Alex Ravi Gilbert



---

5. Emily Pat Davinda Sue Jill

---

Look up the words for these nouns in your dictionary.

Copy the words out carefully.



ABCDEFGHIJKLMNOPQRSTUVWXYZ



## Subtraction with numbers up to 20, no regrouping

---

### Grade 1 Subtraction Worksheet

Find the difference.

1)  $12 - 2 =$  \_\_\_\_\_

2)  $15 - 2 =$  \_\_\_\_\_

3)  $6 - 2 =$  \_\_\_\_\_

4)  $6 - 3 =$  \_\_\_\_\_

5)  $19 - 3 =$  \_\_\_\_\_

6)  $19 - 4 =$  \_\_\_\_\_

7)  $5 - 1 =$  \_\_\_\_\_

8)  $19 - 5 =$  \_\_\_\_\_

9)  $16 - 5 =$  \_\_\_\_\_

10)  $7 - 3 =$  \_\_\_\_\_

11)  $3 - 2 =$  \_\_\_\_\_

12)  $9 - 5 =$  \_\_\_\_\_

13)  $14 - 4 =$  \_\_\_\_\_

14)  $2 - 1 =$  \_\_\_\_\_

15)  $10 - 0 =$  \_\_\_\_\_

16)  $8 - 2 =$  \_\_\_\_\_

17)  $20 - 0 =$  \_\_\_\_\_

18)  $16 - 4 =$  \_\_\_\_\_

19)  $14 - 0 =$  \_\_\_\_\_

20)  $17 - 1 =$  \_\_\_\_\_



## Subtracting whole tens (up to 100)

---

### Grade 1 Subtraction Worksheet

Find the difference.

1)  $90 - 30 =$  \_\_\_\_\_ 2)  $30 - 20 =$  \_\_\_\_\_

3)  $80 - 40 =$  \_\_\_\_\_ 4)  $50 - 40 =$  \_\_\_\_\_

5)  $90 - 20 =$  \_\_\_\_\_ 6)  $80 - 70 =$  \_\_\_\_\_

7)  $90 - 40 =$  \_\_\_\_\_ 8)  $60 - 20 =$  \_\_\_\_\_

9)  $90 - 10 =$  \_\_\_\_\_ 10)  $60 - 20 =$  \_\_\_\_\_

11)  $80 - 30 =$  \_\_\_\_\_ 12)  $70 - 10 =$  \_\_\_\_\_

13)  $20 - 10 =$  \_\_\_\_\_ 14)  $70 - 40 =$  \_\_\_\_\_

15)  $90 - 80 =$  \_\_\_\_\_ 16)  $40 - 10 =$  \_\_\_\_\_

17)  $80 - 40 =$  \_\_\_\_\_ 18)  $90 - 20 =$  \_\_\_\_\_

19)  $60 - 40 =$  \_\_\_\_\_ 20)  $90 - 80 =$  \_\_\_\_\_



## Subtracting whole tens (up to 100)

---

### Grade 1 Subtraction Worksheet

Find the difference.

1)  $90 - 30 = \underline{60}$

2)  $30 - 20 = \underline{10}$

3)  $80 - 40 = \underline{40}$

4)  $50 - 40 = \underline{10}$

5)  $90 - 20 = \underline{70}$

6)  $80 - 70 = \underline{10}$

7)  $90 - 40 = \underline{50}$

8)  $60 - 20 = \underline{40}$

9)  $90 - 10 = \underline{80}$

10)  $60 - 20 = \underline{40}$

11)  $80 - 30 = \underline{50}$

12)  $70 - 10 = \underline{60}$

13)  $20 - 10 = \underline{10}$

14)  $70 - 40 = \underline{30}$

15)  $90 - 80 = \underline{10}$

16)  $40 - 10 = \underline{30}$

17)  $80 - 40 = \underline{40}$

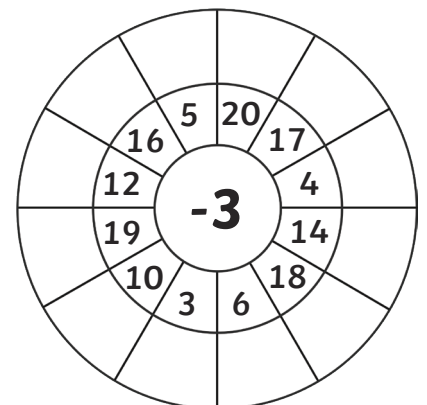
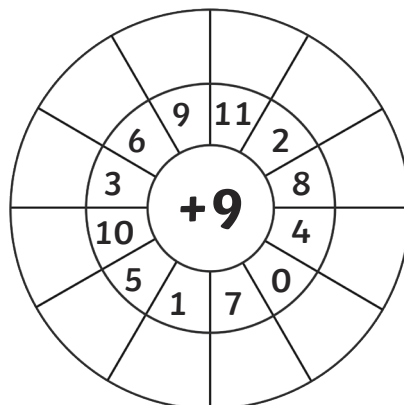
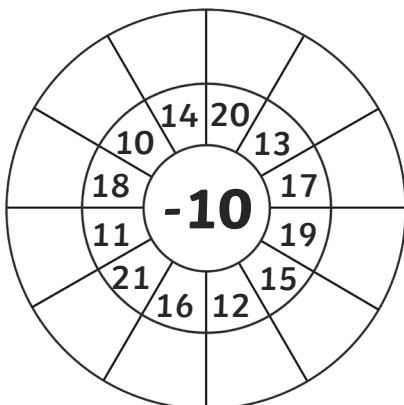
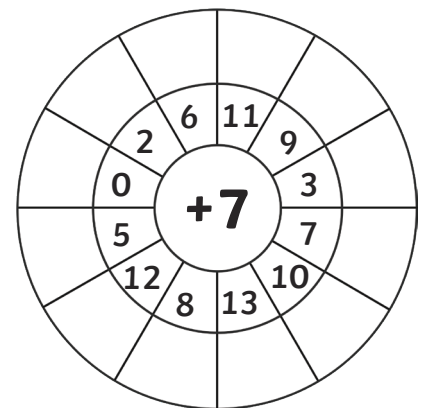
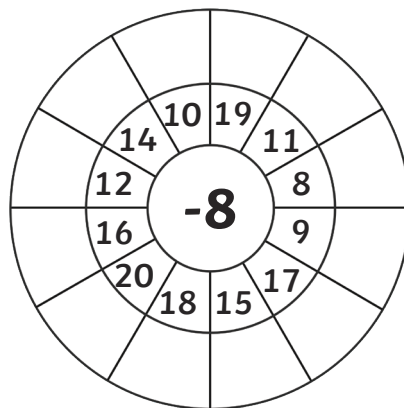
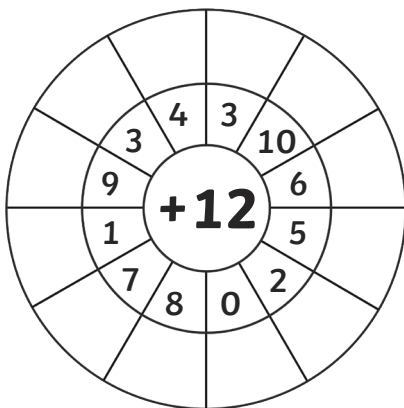
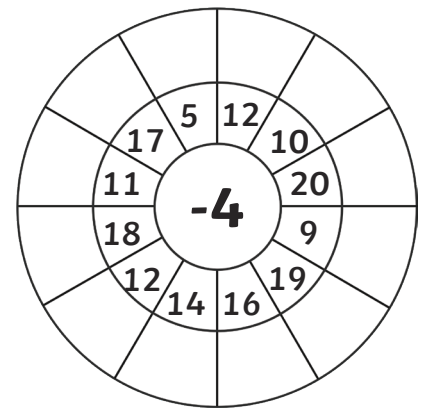
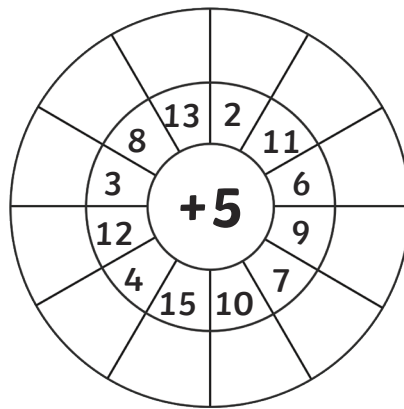
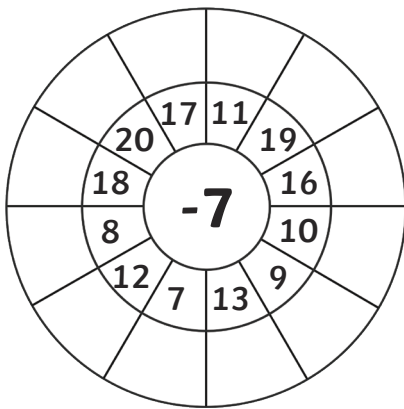
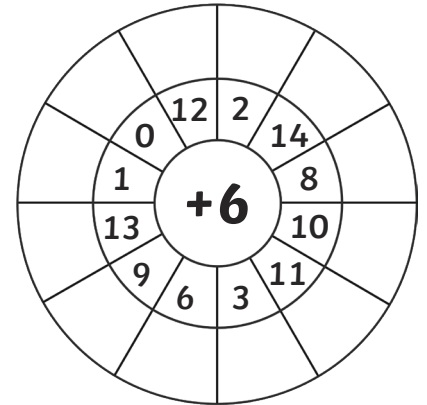
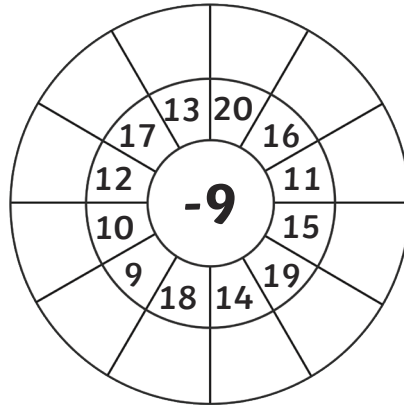
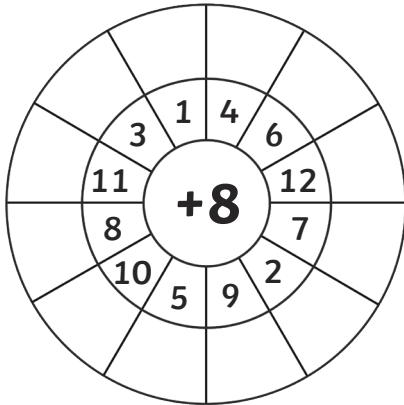
18)  $90 - 20 = \underline{70}$

19)  $60 - 40 = \underline{20}$

20)  $90 - 80 = \underline{10}$

# Addition and Subtraction Wheels

Add or subtract the numbers to the middle number.



Date \_\_\_\_\_



Choose the correct **oy** word and then complete the sentence.

**boy**

**toys**

**joy**

**soya**

**annoyed**


**royal**

**enjoyed**

1. Some people drink \_\_\_\_\_ milk.
2. I want many \_\_\_\_\_ for my birthday.
3. Bob is a very tall \_\_\_\_\_.
4. The queen is part of the \_\_\_\_\_ family.
5. We \_\_\_\_\_ a day in the park.
6. You can get a lot of \_\_\_\_\_ when you give to the poor.
7. His loud voice \_\_\_\_\_ me.

# Echidnas

Echidnas are mammals and belong to the monotreme family. They can be found throughout most of Australia including forests and grasslands.



An echidna's body is covered with spines and coarse hair. They can grow up to 40cm long and can weigh around 7kg. They have very strong front limbs and claws.

An echidna eats ants and termites. It uses its long snout to reach into ant nests and its sticky long tongue to catch them. Echidnas have no teeth.


A baby echidna is called a 'puggle'. A puggle will hatch out of the egg inside its mothers pouch after around 12 days. It will stay in the pouch, drink milk and develop for a few months.

When an echidna is scared, it will use its sharp claws to dig itself into the ground and will roll into a ball to protect itself from predators.

Name: \_\_\_\_\_

# Echidna

Draw a picture of an echidna and label each part.



A large, empty rectangular box for drawing and labeling the echidna.




What do you know about an...

Fact #1

Fact #2


# Echidna



Fact #3

Fact #4

Name: \_\_\_\_\_




Name: \_\_\_\_\_

# Aussie Animals Word Search

- Bandicoot
- Cockatoo
- Dingo
- Echidna
- Emu
- Kangaroo
- Koala
- Kookaburra
- Platypus
- Possum
- Tasmanian Devil
- Wombat

A	R	D	K	U	E	E	D	Y	P	D	E	K	I
S	F	D	A	M	T	O	F	Y	D	I	E	C	P
K	U	S	N	N	U	I	S	U	S	N	N	O	W
E	M	U	G	B	L	L	S	I	A	G	M	C	O
C	I	P	A	R	R	U	B	A	K	O	O	K	M
H	P	Y	R	A	T	O	O	C	I	D	N	A	B
I	H	T	O	E	F	K	A	K	A	D	S	T	A
D	T	A	O	G	R	O	O	L	O	A	K	O	T
N	S	L	H	T	K	L	O	R	V	A	B	O	H
A	A	P	O	S	S	U	M	I	U	Y	L	N	R
L	I	V	E	D	N	A	I	N	A	M	S	A	T





Cut out these shapes and put them in order starting with the shape with the smallest area until you finish with the shape with the largest area.

# Super Carers!

Based on *Who's Your Real Mum?* by Bernadette Green and Anna Zobel



Listen to Mrs Vitnell read a story here:

[https://drive.google.com/file/d/1rVRTgk5oovoqyCl\\_ywDEwTdTM6WFg9M1/view?usp=sharing](https://drive.google.com/file/d/1rVRTgk5oovoqyCl_ywDEwTdTM6WFg9M1/view?usp=sharing) and then complete the worksheet.

Families are made up of lots of different people. Elvi had two mums.

Draw your family and label who they are to you.

A large, empty rectangular box with a black border, intended for drawing a family.Two empty rectangular boxes with black borders, one on the left and one on the right, intended for drawing and writing.

Elvi's mums could do the most amazing things according to Elvi! Do you think that her mums could really do all those things or was it just in her imagination? Use your imagination to draw and write something 'unreal' that your mum/dad/special person can do!


Elvi's mums tuck her into bed, kiss her goodnight, hold her when she is scared. What is one thing that you enjoy most of all doing with your mum/dad/special person? Draw a picture above.

# Platypus

The platypus belongs to the **monotreme** group of **mammals**.

They can be found in and around ponds,

banks, creeks, streams and rivers of Eastern Australia, including Tasmania.



Platypuses are known for being one of the most unique creatures as they have a mixture of features from other animals like ducks, otters and beavers. They have webbed feet, a rubbery bill, waterproof fur and a flat tail. The male platypus has a poisonous, sharp **spur** on the heels of their hind legs which they use to fight away **predators**.

Platypuses are **carnivorous**. They like to eat insects and shellfish. They store food in special pouches in their cheeks.

A female platypus will lay an egg and after around 10 days the egg will hatch. The baby platypus will then stay safe in a burrow where it is looked after by its mother for around 4 months.


What do you know about a...

Fact #1

# Platypus

Fact #2

Fact #3




Fact #4

Name: \_\_\_\_\_

Name: \_\_\_\_\_

# Platypus

Draw a picture of a platypus and label each part.









A large empty rectangular box for drawing and labeling a platypus.



Name: \_\_\_\_\_ oi & oy

# Roll & Record

Roll the die. Write the word that the roll indicates. See which word will win!

					
oil	royal	boil	toy	spoil	cowboy





Thursday 16th September, 2021



p q p q p q p q p



P Q P Q P Q P Q



Penny found a quiet quail sitting



propped up on a plum tree in a



potato field.

## My Funny and Positive Jokes

Write 3 of your own funny and positive jokes below. Remember positive means it does not make anyone upset.

*E.g. Do you know why you need to be extra nice to banana?*

*You don't want to hurt their feelings.*

1. \_\_\_\_\_

\_\_\_\_\_

\_\_\_\_\_

2. \_\_\_\_\_

\_\_\_\_\_

\_\_\_\_\_

3. \_\_\_\_\_

\_\_\_\_\_

\_\_\_\_\_

**1** Use your shoe as the measuring unit to measure each distance. How many shoes fit:

**a** across the doorway?



Estimate

Shoes


**b** across your desk?



Estimate

Shoes


**c** along the chalkboard?



Estimate

Shoes

**d** across the cupboard?



Estimate

Shoes

**2** Did everybody have the same answer as you? \_\_\_\_\_

**3** Explain why. \_\_\_\_\_

How many hands **long** is it from your front door to the letterbox?




How many hands would you need to cover your coffee table?



How many hands **long** is your bath?



How many hands **tall** is your fridge?



Throw a ball, **measure** how **far** it went using your hands.



Measure how **tall** your family members are using your hands.

Who is the tallest,



# Many Hands Measuring



How many hands **wide** is your driveway?



Find five things that are **shorter** than your hand. Order them from shortest to tallest.



*\*\* You could trace around your hand and cut it out to use for your measuring, When you have finished measuring you could decorate your hand \*\**

Find five things that are **longer** than your hand. Order them from shortest to tallest.



How many hands would you need to **cover** your towel?



How many hands **long** is your dining table?



What is the **total** number of hands in your family?

How many fingers?

How many toes?

How many ears?

How many noses?

How many paws?

How many hands **long** is your bed?



How many hands would you need to **cover** your pillow?



## Tiddalick the Frog

1. Why did Tiddalick drink all the water?

---

2. What did the animals do to get Tiddalick to open his mouth?

---

3. Do you think Tiddalick was being fair to all the other animals? Why/Why not?

---

4. What happened to the earth/land when Tiddalick finally opened his mouth?

---

5. What is the name of another dreamtime story you know of? What happened in the story?

---

---

---

---

---

---

# Compound Words

The compound birds have muddled up their tails.  
Can you sort them out?

